

BUDHA DAL PUBLIC SCHOOL, PATIALA
FINAL EXAMINATION (, MARCH 2025)

Subject- Maths

Class -1 Set- A

Name _____

Roll No. _____

Section _____

Time: 2hrs30min.

Maximum Marks: 60

Section-A

Multiple Choice Questions

10 M

Choose the correct answer:

1) ₹ 8 + ₹ 2 = _____

(1)

A. ₹ 82

C. ₹ 28

B. ₹ 6

D. ₹ 10

2) What is the difference between 8 and 2?

(1)

A. 6

C. 2

B. 4

D. 7

3) Identify the lightest bird among the following.

(1)

A.



C.



B.



D.



4) Which vehicle is the lightest?

(1)

A.



C.



B.



D.



5) What is the following subtraction?

(1)

	O
	8
-	6

A. 2

C. 3

B. 6

D. 4

6) How is 6 rupees written?

(1)

A. six ₹

B. ₹6

C. 6R

D. 6r

7) How many cubits is the length of the doormat?

(1)



8) Identify the collection in the picture.

(1)



A. A collection of books

C. A collection of balloons

B. A collection of balls

D. A collection of shoes

9) How much does 5 coins of ₹5 make?

(1)

A. ₹ 20

C. ₹ 15

B. ₹ 30

D. ₹ 25

10) Which of the following coins has the least value?

(1)

A.



C.



B.



D.



Section-B

Very Short Answer Questions

13 M

Fill in the blanks:

11) ₹ 2 + ₹ 3 = ₹ ____.

(1)

12) The notes and coins used to buy things are called ____.

(1)

13) The lightest among the following is the ____.

(1)



Feather

Book

Comb

Table

Bag

14) 3 - 1 = ____

(1)

15) ₹10 + ₹50 = ₹ ____

(1)

16) Among the given things, the pencil box is _____ (lighter/heavier) than the backpack.

(1)



pencil box



backpack

Answer the following:

17) Kids with balls in the picture are crossed out. How many kids with other activities remain? (1)



18) What is the total number of  and  in the given picture? (1)

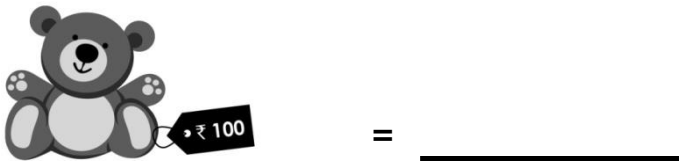
_____ + _____ = _____



19) Find the total amount. (1)



20) Write the price of the toy given. (1)



21) Which vegetable is the heaviest? (1)




Pumpkin



Chilli



Tomato



Potato



Onion

=

- 22) In the given picture, tables with three items are crossed out. How many tables are left? (1)



= _____

- 23) How much is ₹10 + ₹10 + ₹10 + ₹10 + ₹10? (1)

Section-C

Short Answer Questions

26 M

- 24) Subtract 55 from 97 using vertical subtraction. (2)

	T	O
—		

- 25) Subtract the following. (4)

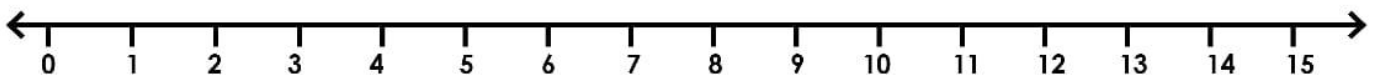
a) $9 - 9$

	O
—	

b) $4 - 3$

	O
—	

- 26) Subtract 2 from 6 using the number line. (2)



So, _____ - _____ = _____

27) Order the following from the lightest to the heaviest. Write 1 for the lightest and 3 for the heaviest. (3)

a)







b)







28) Measure the given items using cubits: (2)

	Object	Number of cubits
a)		_____ cubits
b)		_____ cubits

29) Fill in the blanks with heavier/lighter. (2)

a)



The wheat sack is _____ than the leaf.

b)



The ice cream is _____ than the brick.

- 30) The money that Kamal and Rohan have is shown below. How much money does each of them have? Who has more money? (3)

Kamal:  +  +  +  = _____

Rohan:  +  +  +  +  = _____

- 31) There are total 54 students in a class. If there are 33 boys, find the number of girls in the class? (4)

Solution:

Total number of students = _____

Number of boys = _____

Number of girls = _____ - _____

T	O

So, there are _____ girls in the class.

- 32) Jack baked 54 cookies for his shop. If he sold 31 cookies, how many cookies were left with him? (4)

Solution:

Number of cookies with Jack = _____

Number of cookies Jack sold = _____

Number of cookies left with Jack = _____ - _____

T	O









Therefore, Jack has _____ cookies left.

Section-D**Graphic Organisers****11 M**

Answer the following:

33) Tick the object which is heavier than the other.

(4)

 bag <input type="checkbox"/>	 pen <input type="checkbox"/>
<div style="display: flex; justify-content: space-around; align-items: center;"> <div style="text-align: center;">↑ ↓</div> <div style="border: 1px solid black; padding: 5px;">Heavier</div> <div style="text-align: center;">↑ ↓</div> </div>	
 mobile <input type="checkbox"/>	 cupboard <input type="checkbox"/>
 shirt <input type="checkbox"/>	 paper pin <input type="checkbox"/>
 grapes <input type="checkbox"/>	 pumpkin <input type="checkbox"/>

34) Subtract vertically.

(4)

Subtract																																			
<table border="1" style="width: 100%; text-align: center;"> <tr><th>T</th><th>O</th></tr> <tr><td>8</td><td>3</td></tr> <tr><td>7</td><td>1</td></tr> <tr><td>1</td><td></td></tr> </table>	T	O	8	3	7	1	1		<table border="1" style="width: 100%; text-align: center;"> <tr><th>T</th><th>O</th></tr> <tr><td>7</td><td>7</td></tr> <tr><td>2</td><td>3</td></tr> <tr><td>5</td><td></td></tr> </table>	T	O	7	7	2	3	5		<table border="1" style="width: 100%; text-align: center;"> <tr><th>T</th><th>O</th></tr> <tr><td>9</td><td>5</td></tr> <tr><td>6</td><td>3</td></tr> <tr><td>3</td><td></td></tr> </table>	T	O	9	5	6	3	3		<table border="1" style="width: 100%; text-align: center;"> <tr><th>T</th><th>O</th></tr> <tr><td>5</td><td>8</td></tr> <tr><td>2</td><td>6</td></tr> <tr><td>3</td><td></td></tr> </table>	T	O	5	8	2	6	3	
T	O																																		
8	3																																		
7	1																																		
1																																			
T	O																																		
7	7																																		
2	3																																		
5																																			
T	O																																		
9	5																																		
6	3																																		
3																																			
T	O																																		
5	8																																		
2	6																																		
3																																			

35) Look at the objects shown below. Fill in the blanks with the correct answers. (3)



a) The total number of glasses is _____.

b) The total number of toffees is _____.

c) The total number of cupcakes is _____.